



Name _____

Geometry, Area, and Perimeter Practice

1. Mark the right angles. Answer the questions



Number of sides _____

Number of sides _____


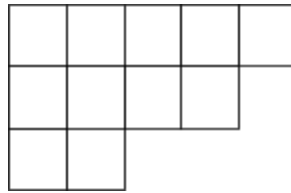
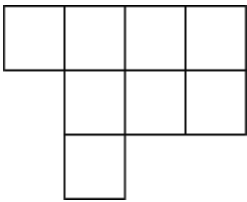
Number of sides _____

Number of angles _____

Number of angles _____

Number of angles _____

2. Find the area and perimeter of each figure.



Area _____

Area _____

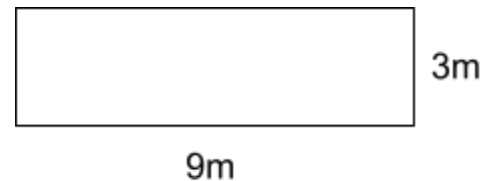
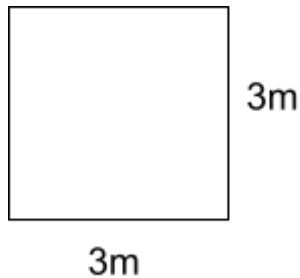
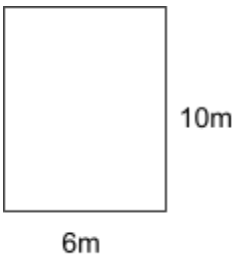
Area _____

Perimeter _____

Perimeter _____

Perimeter _____

3. Find the Area and perimeter of each rectangle.



Area _____

Area _____

Area _____

Perimeter _____

Perimeter _____

Perimeter _____

4. Find the perimeter of each shape.

